


BLOCK

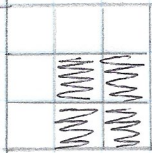
How many?

①




4

②




20

③



4

④




4

⑤



12

⑥



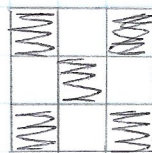
8

⑦



2

⑧



1

BLOCK


How many?

⑨




4

⑩



16

⑪



8

It's A MYSTERY —

NOW THE FINAL CLUE  
TO BLOCK LISTING.

YOU SHOULD HAVE THE  
# OF BLOCKS IN EACH LAYOUT  
THIS IS WHERE WE  
WILL START FOR THE REVEAL

THANKS FOR SEWING ALONG!

Carole